



ENDANGERED ANIMAL NUMBER CHALLENGE!


Endangered animals are ones that have been classified as very likely to become extinct because there are not enough of them to breed. Can you add, subtract, multiply and divide the animals below? Write your answer on the dotted line!



A




+




=

.....

B




x




=

.....

C




-




=

.....

D



÷



=

.....

Sadly, the endangered animals list is growing as climate change is affecting the homes of lots of animals all over the world. Draw your favourite animal below and let us know why it is your favourite on the dotted lines!

.....

.....

.....

.....

(correct answers: 7, 12, 2, 4)

We love seeing all of your creations, so don't forget to share them with us on social media by using the hashtag #firstwonderbox



Find more fun activities like this at firstwonderbox.co.uk, or sign up and receive a fortnightly box of adventure, delivered direct to your door - get your first box half price!

